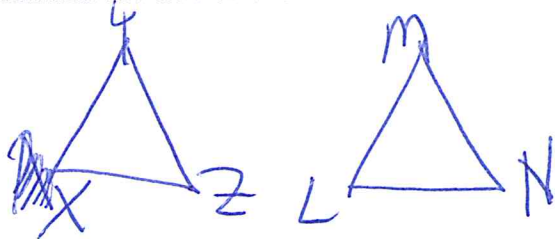


Name Schlansky
Mr. Schlansky

IF the parts correspond, they're congruent
IF the parts don't correspond, they're not congruent.
Date _____
Geometry

Corresponding Parts of Congruent Triangles

1. Triangle XYZ is congruent to triangle LMN. Determine whether the following statements are true or false.



a) $\overline{XY} \cong \overline{LM}$

Yes

b) $\overline{YZ} \cong \overline{LN}$

No

c) $\overline{ZX} \cong \overline{NL}$

Yes

d) $\overline{XZ} \cong \overline{MN}$

No

e) $\angle L \cong \angle Y$

No

f) $\angle M \cong \angle Z$

No

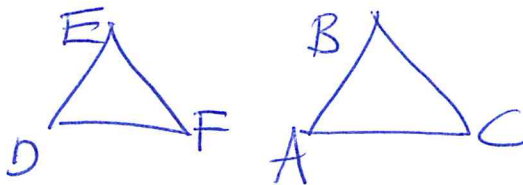
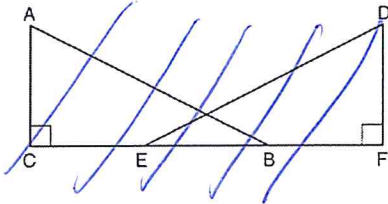
g) $\angle Z \cong \angle N$

Yes

h) $\angle M \cong \angle Y$

Yes

2. Right triangle DEF is the image of right triangle ABC after a sequence of rigid motions. Determine whether the following statements are true or false.



a) $\overline{AC} \cong \overline{EF}$

No

b) $\overline{AB} \cong \overline{DE}$

Yes

c) $\overline{CA} \cong \overline{FD}$

Yes

d) $\overline{BC} \cong \overline{DF}$

No

e) $\angle D \cong \angle B$

No

f) $\angle C \cong \angle F$

Yes

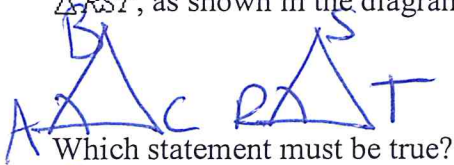
g) $\angle E \cong \angle B$

Yes

h) $\angle E \cong \angle C$

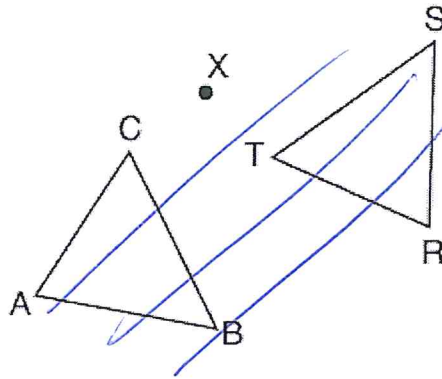
No

3. After a counterclockwise rotation about point X , scalene triangle ABC maps onto $\triangle RST$, as shown in the diagram below.



Which statement must be true?

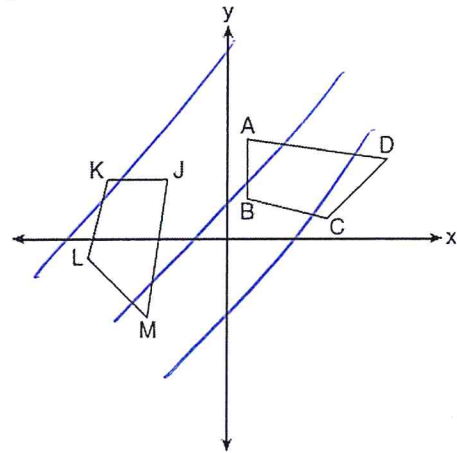
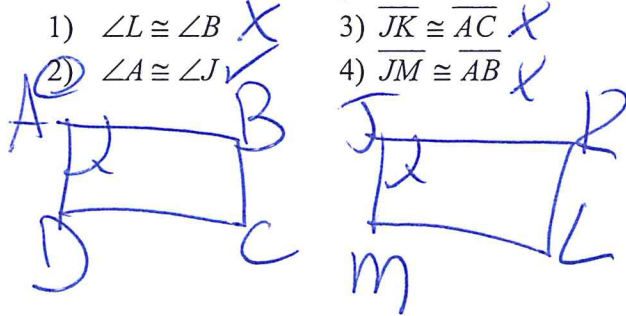
- 1) $\angle A \cong \angle R$ ✓
- 2) $\angle A \cong \angle S$ ✗
- 3) $\overline{CB} \cong \overline{TR}$ ✗
- 4) $\overline{CA} \cong \overline{TS}$ ✗



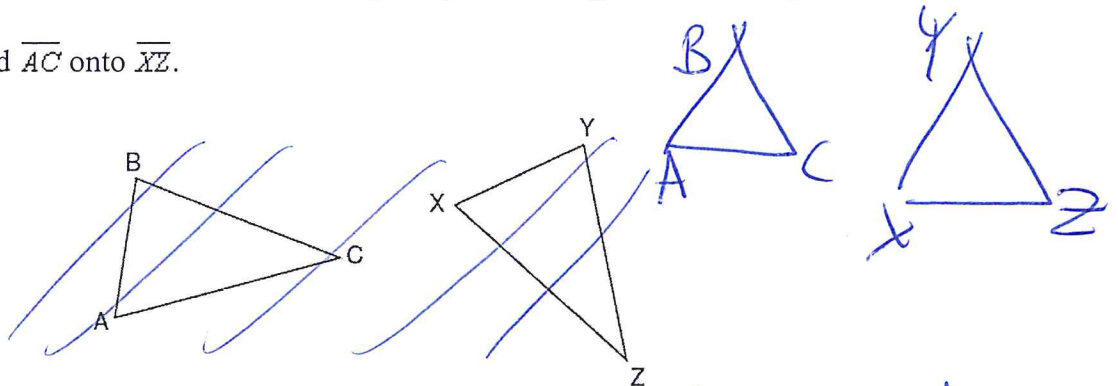
4. In the diagram below, a sequence of rigid motions maps $ABCD$ onto $JKLM$.

Which of the following statements must be true?

- 1) $\angle L \cong \angle B$ ✗
- 2) $\angle A \cong \angle J$ ✓
- 3) $\overline{JK} \cong \overline{AC}$ ✗
- 4) $\overline{JM} \cong \overline{AB}$ ✗



5. In the diagram below of $\triangle ABC$ and $\triangle XYZ$, a sequence of rigid motions maps $\angle A$ onto $\angle X$, $\angle C$ onto $\angle Z$, and \overline{AC} onto \overline{XZ} .



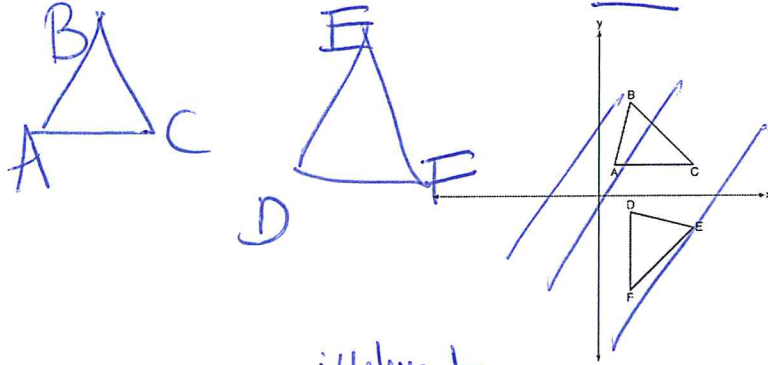
Determine and state whether $\overline{BC} \cong \overline{YZ}$. Explain why. *Yes, the sides correspond.*

Determine and state whether $\angle A \cong \angle Y$. Explain why. *No, the angles don't correspond.*

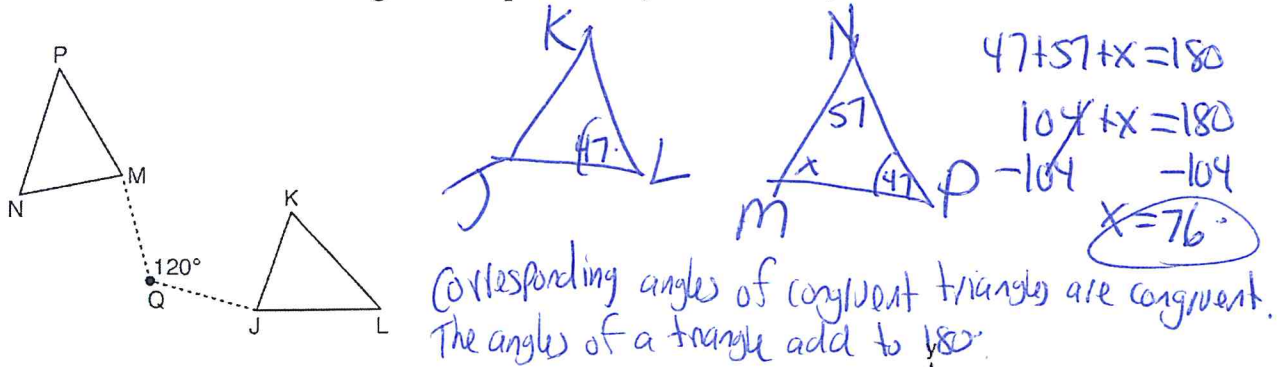
6. The image of $\triangle ABC$ after a rotation of 90° clockwise about the origin is $\triangle DEF$, as shown below.

Which statement is true?

- 1) $\overline{BC} \cong \overline{DE}$ X
- 2) $\overline{AB} \cong \overline{DF}$ X
- 3) $\angle C \cong \angle E$ X
- 4) $\angle A \cong \angle D$ ✓



7. Triangle MNP is the image of triangle JKL after a 120° counterclockwise rotation about point Q . If the measure of angle L is 47° and the measure of angle N is 57° , determine the measure of angle M . Explain how you arrived at your answer.



8. In the diagram below, a sequence of rigid motions m $ABCD$ onto $JKLM$.

If $m\angle A = 82^\circ$, $m\angle B = 104^\circ$, and $m\angle L = 121^\circ$, the measure of $\angle M$ is

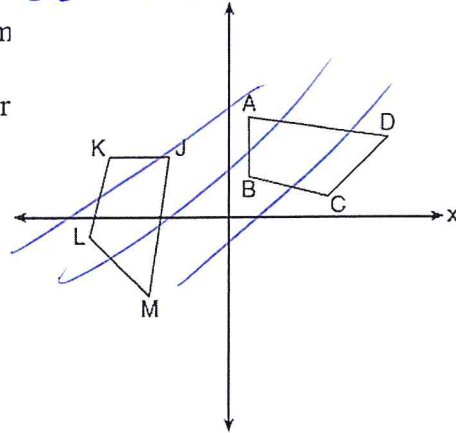
- 1) 53°
- 2) 82°
- 3) 104°
- 4) 121°

$$121 + 104 + 82 + x = 360$$

$$307 + x = 360$$

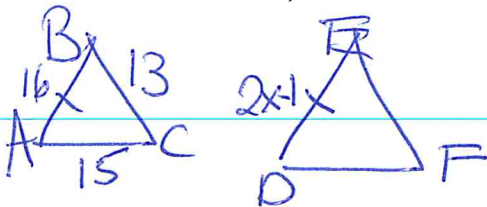
$$-307 \quad -307$$

$$x = 53$$



9. In the diagram below, $\triangle ABC$ with sides 13, 15, and 16, is mapped onto $\triangle DEF$ after a clockwise rotation of 90° about point P .

If $DE = 2x - 1$, what is the value of x ?



$$2x - 1 = 16$$

$$+1 \quad +1$$

$$\frac{2x}{2} = \frac{17}{2}$$

$$x = 8.5$$

