


Name _____
Mr. Schlansky

Date _____
Algebra II


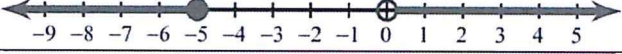
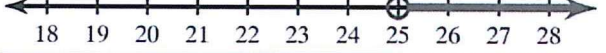
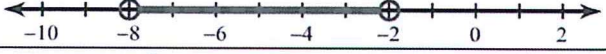


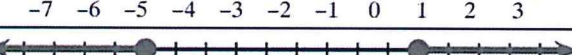
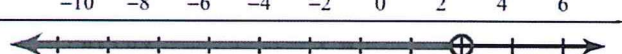



Interval Notation and Set Builder Notation

For each graph, write the appropriate interval in both set and interval notation.

	Graph	Set Notation	Interval Notation
1			
2			
3			
4			
5			
6			
7			
8			
9			
10			

	Graph	Set Notation	Interval Notation
11			
12			
13			
14			
15			
16			
17			

	Graph	Set Notation	Interval Notation
18			
19			
20			
21			
22			
23			
24			
25			
26			
27	