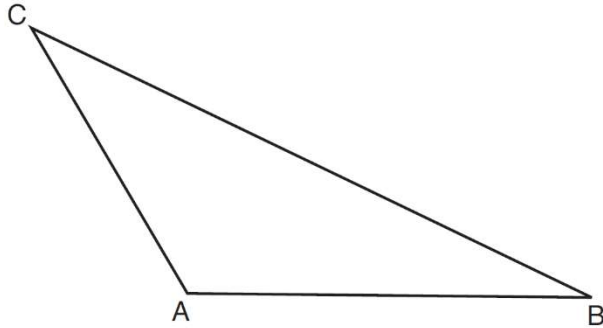


Name _____
Mr. Schlansky

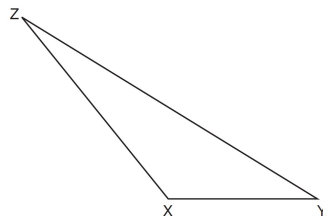
Date _____
Geometry

Dilating Shapes Using Constructions

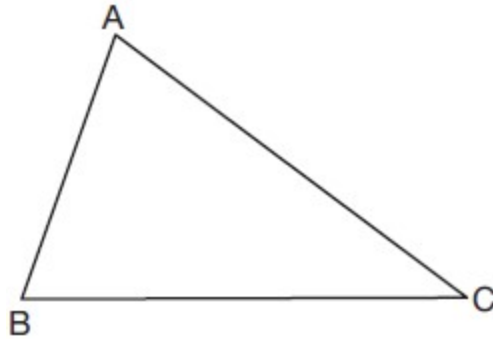
1. Dilate $\triangle ABC$ by a scale factor of 2 centered at point C. [Leave all construction marks.]



2. Dilate $\triangle XYZ$ by a scale factor of 4 centered at point X. [Leave all construction marks.]



3. Triangle ABC is shown below. Using a compass and straightedge, construct the dilation of $\triangle ABC$ centered at B with a scale factor of 2. [Leave all construction marks.]



4. Using a compass and straightedge, construct and label $\triangle A'B'C'$, the image of $\triangle ABC$ after a dilation with a scale factor of 3 and centered at B .

