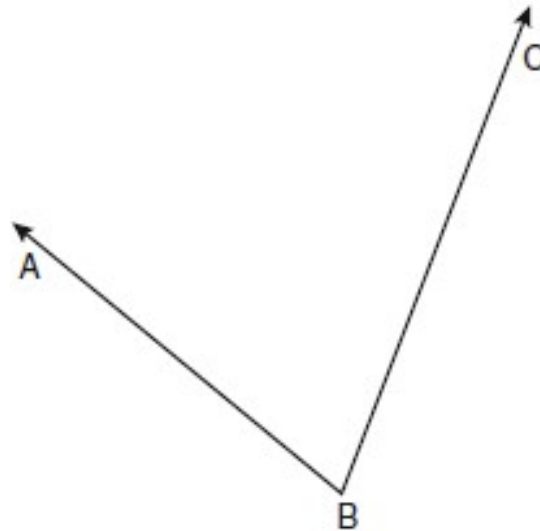


Name _____
Mr. Schlansky

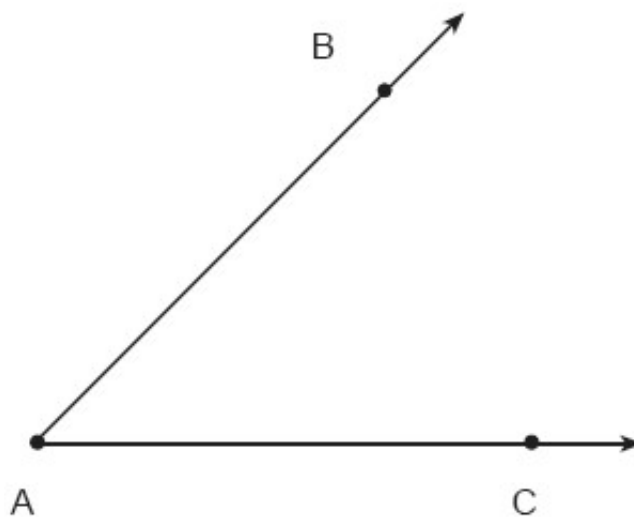
Date _____
Geometry

Constructing Bisectors

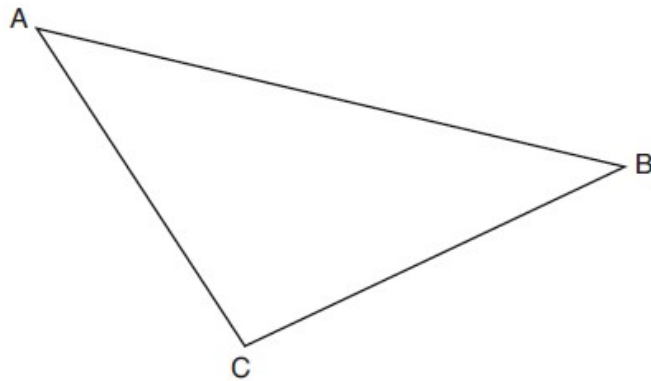
1. Using a compass and straightedge, construct the angle bisector of $\angle ABC$ shown below. [Leave all construction marks.]



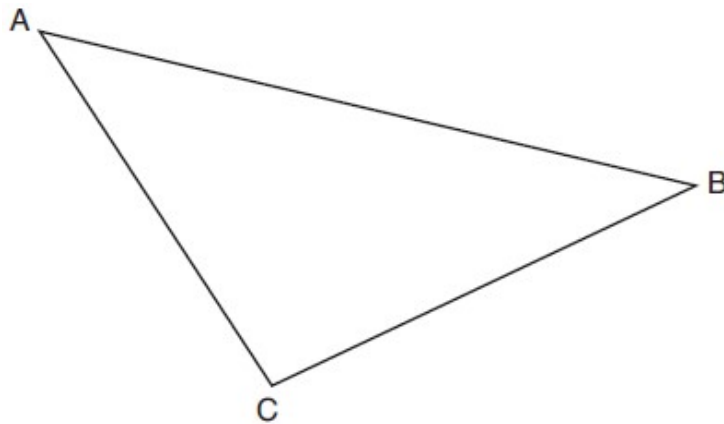
2. Using only a ruler and compass, construct the bisector of angle BAC in the accompanying diagram.



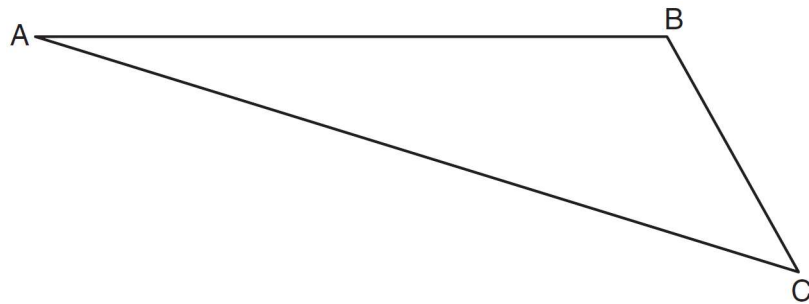
3. Using a compass and straightedge, construct the angle bisector of $\angle ACB$ in $\triangle ABC$ below.
[Leave all construction marks.]



4. Using a compass and straightedge, construct the angle bisector of $\angle ABC$ in $\triangle ABC$ below.
[Leave all construction marks.]



5. Using a compass and straightedge, construct the angle bisector of $\angle BAC$ in $\triangle ABC$ below.
[Leave all construction marks.]



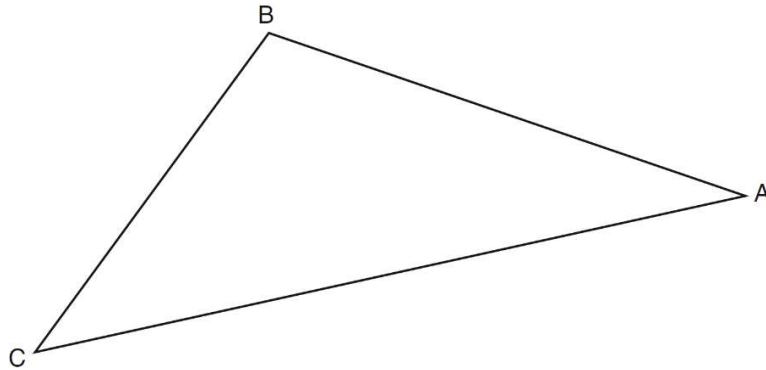
6. Using only a compass and a straightedge, construct the perpendicular bisector of \overline{AB} and label it c . [Leave all construction marks.]



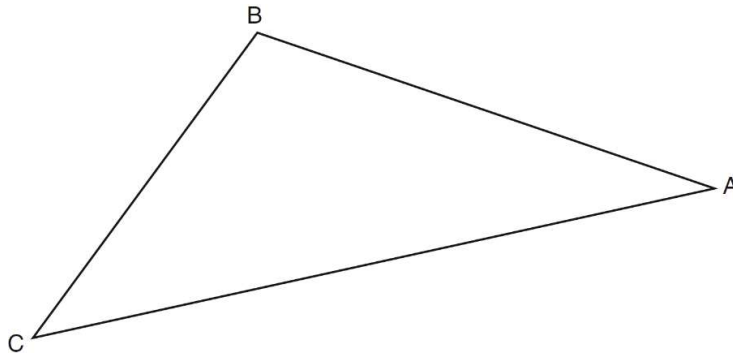
7. Using a compass and straightedge, construct the perpendicular bisector of \overline{AB} shown below. Show all construction marks.



8. Using a compass and straightedge, construct a perpendicular bisector to side AC. [Leave all construction marks.]



9. Using a compass and straightedge, construct a perpendicular bisector to side BC. [Leave all construction marks.]



10. On the diagram of $\triangle ABC$ shown below, use a compass and straightedge to construct a perpendicular bisector to side BC. [Leave all construction marks.]

