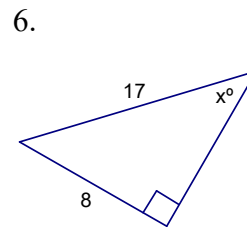
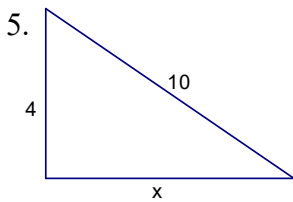
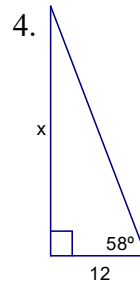
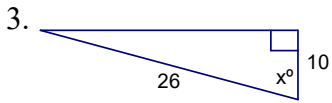
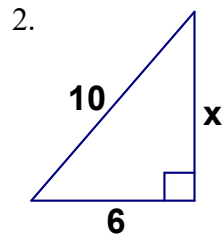
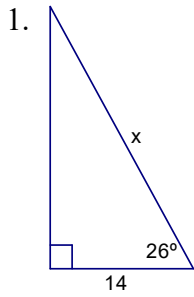


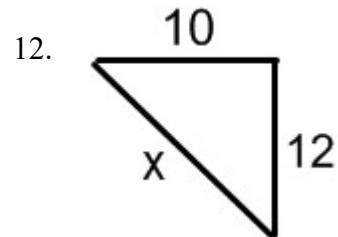
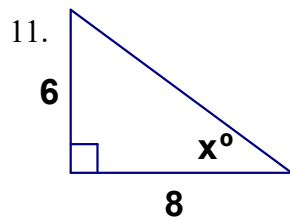
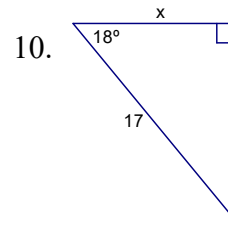
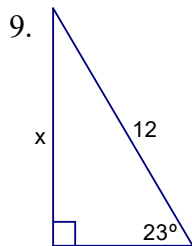
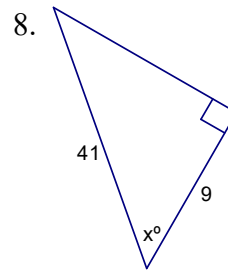
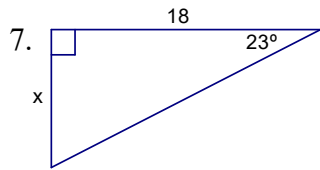
Name _____
Mr. Schlansky

Date _____
Geometry

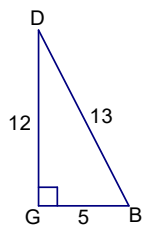
Right Triangles Practice

In each example, find the value of x and round to the nearest tenth if necessary





13. Answer the following questions using the diagram below:



a) $\cos D =$

b) $\sin D =$

c) $\tan D =$

d) $\tan B =$

e) $\sin B =$

f) $\cos B =$